

Hello Year 3!

We hope that you are all well and are keeping safe. We are missing you lots.

Thank you for continuing to work hard at home but do not worry if you can't complete all of the activities. Remember that you are all amazing and you need to have lots of fun too!

Keep Smiling



English

Monday- Spend some time looking at the new spellings for this week. Can you find the definition for each of the words using a dictionary/online dictionary? Can you include each spelling in a sentence? Remember to use the correct punctuation.

Tuesday – <https://www.literacyshed.com/nightzoo.html> (the third video) Before you watch the video answer the questions on the next page. Then watch the video. After the video, answer the questions on the next page.

Wednesday – Can you draw a picture of the good and bad day and write a few sentences to describe them. Use the tips on the next page to help you.

Thursday – Start to think about the problem your animal could face. Write some notes to help you when you write your story.

Friday – Get someone at home to test you on your spellings. How many will you get right?

Maths

Monday – This week you are going to be putting fractions in order. It's easier to order them if they have the same denominator (bottom number) but can get tricky if they don't have the same denominator. Watch this video to help you understand and then have a go at ordering the fractions on the next page. Don't worry if you find it tricky. <https://www.bbc.co.uk/bitesize/clips/zvvgkat>

Tuesday – Play this game to recap yesterday's work. <https://www.topmarks.co.uk/Flash.aspx?a=activity07> Now have a go at some more ordering fractions on the next page.

Wednesday – Well done for working so hard this week. Now you have had some practise ordering fractions, have a go at some problem solving and reasoning questions.

Thursday – Continue from where you left off yesterday and see if you can complete the last couple of problem solving and reasoning questions.

Friday – Have a look at some multiplication word problems. Can you write a number sentence for each one?



Spellings

Miss Kelsey's and Mrs Hodgson's Group	Mrs McGee's Group
Natural	Kindly
Occasional	Quickly
Actual	Safely
Accidental	Rudely
Medical	Sweetly
National	Strongly
Capital	Bravely
Vocal	Secretly
Sensational	Finally
Personal	Usually

Extra Activities

RE

What do you think about Adam and Eve's behaviour? Was it wrong?

Can you think about a balanced argument for the question?

Start your sentences with

"On the one hand ... on the other hand..."



MFL

Can you learn how to count to 20 in a different language? You could count in French, German, Mandarin, Spanish, Italian or another language. Make a poster to help you remember how to count from 1-20 in your chosen language.

1 2 3 4 5 6 7 8 9
10 11 12 13 14 15
16 17 18 19 20

ART

Draw a sound creature. Have a look at this website. It will explain all about what a sound creature is and how to draw one.

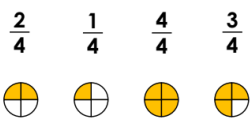
<https://www.tate.org.uk/kids/make/art-technology/draw-sound-creature>



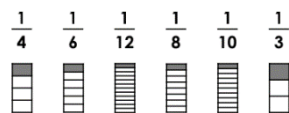
Maths activities:

Monday


Order the fractions in ascending order.



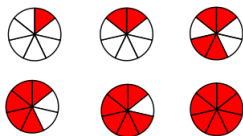
Order the fractions in ascending order.



7a. Order the fractions in descending order.

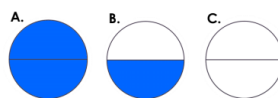


8a. What is the missing fraction in the sequence? Write your answer as a fraction.



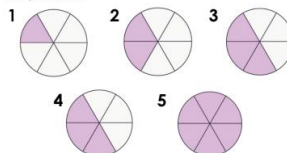
Wednesday

Habib has put these fractions in order from smallest to largest. Is he correct?



Explain your answer.

Which is the incorrect fraction in this sequence?



Explain your answer.

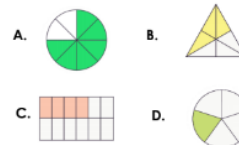
Use the images to help you complete the sequence.



Colour and write the next fraction in the sequence.



Simon has put these fractions in order from smallest to largest. Is he correct?



Explain your answer.

Tuesday

Split strips of paper into halves, thirds, quarters, fifths and sixths and colour in one part of each strip.

Now order the strips from smallest to largest.

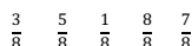


When the numerators are the same, the _____ the denominator, the _____ the fraction.

Place these fractions on the number line.



Order the fractions in descending order.



Thursday



When the denominators are the same, the larger the numerator, the smaller the fraction.

Is James correct? Prove it.

Complete the fractions so the fractions are ordered correctly.

Fractions in ascending order



Friday

- How many legs would 6 spiders have altogether?
- The coach splits the group of 24 children into 8 equal teams. Each team needs a football between 3 children. How many footballs does each team need?
- How many 30p chews can I buy for £1.20? Will I have any money left over?

English Activities

TUESDAY –

Key questions to ask before watching the video:

- Think about your favourite story. Are there any problems in it that the main characters face?
- What problems have you come up against in your life recently? Could these be included in a story?
- Can you think of examples of problems that characters may face within adventure stories?

Key questions to ask after watching the video:

- What problem did Tom Rivers face in the video?
- What problem did the Penguin Professor face in the video?
- Can you think of a problem to include in your story?
- When should you introduce the problem in a story? At the beginning, in the middle, or at the end?

WEDNESDAY –

A Bad Day

Next I want you to write about a day in the life of your character, where everything goes wrong! If they were having the worst day of their life, what would happen?

A Normal Day

I want you to start by telling me what happens on a normal day in the life of your magical animal character. What do they do when they wake up? Where do they go? Who do they meet? Do they have a job or hobby?

