

Year Three Activities

W.b.8th June 2020

Hello Year 3 ☺

We hope that you are all well and are keeping safe. We are missing you lots.

Thank you for continuing to work hard at home. Remember to have lots of fun too!

Keep Smiling!

English

Monday- Spend some time looking at the new spellings for this week. Can you find the definition for each of the words using a dictionary/online dictionary? Can you include each spelling in a sentence? Remember to use the correct punctuation. **Tuesday** - Listen to the final chapter of the Iron Man.

(<https://www.youtube.com/watch?v=HzGQUs6Vcjc&list=PL3Uq1O-NxCBYGOa2VvzNB82JIX67UwoQU&index=5>) Discuss the questions on the next page with someone at home.

Wednesday – Think about the questions you looked at yesterday. Can you create a book review for the Iron Man? You can set this out however you like. Look at the next page to give you some ideas.


Thursday – Revise inverted commas. Can you punctuate the speech correctly, please find the sentences on the next page. <https://www.bbc.co.uk/teach/supermovers/ks2-english-inverted-commas-with-mr-smith/z62rhhbk>

Friday – Get a grown up to test you on your spellings.

Maths - Fractions

Monday - Watch the following video which explains the difference between unit-fractions and non-unit fractions. Then have a go at the questions on the next page. <https://www.youtube.com/watch?v=OvrRaYcSRYA>

Tuesday – Time to make a fraction museum. Use different objects in your home to represent different fractions. See page two for some ideas.

 for example: $\frac{4}{7}$ are red and $\frac{3}{7}$ are green.

Wednesday – <https://www.youtube.com/watch?v=YwxVv2ZE1Y4> Use the video to look at tenths, can you complete the two questions on page 2?

Thursday – Can you count in tenths?

$\frac{1}{10}$ $\frac{2}{10}$ $\frac{3}{10}$ $\frac{4}{10}$ $\frac{5}{10}$ $\frac{6}{10}$ $\frac{7}{10}$ $\frac{8}{10}$ $\frac{9}{10}$ $\frac{10}{10}$

Have a go at the problem solving activity on the second page. Can you include a diagram to support your explanation?

Friday - Times tables, keep practising your times tables regularly. Can you make a game that could help people practise their 3, 4 and 8 times tables?

Spellings

Miss Kelsey's and
Mrs Hodgson's
Group

Mrs McGee's Group

enough
young
touch
double
trouble
country
courage
rough
tough
cousin

straight
campaign
contain
brain
faint
waist
claim
praise
complaint
afraid

Extra Activities

RE

Over the last few weeks, you have looked at the wonderful world that God created. Can you write a prayer to God to thank him for his wonderful creation?



History – Stockton to Darlington Railway

The Stockton to Darlington railway line was the first ever passenger carrying line. Use the internet to research this. Can you find 10 facts about the Stockton to Darlington railway?


PE

Plan a sports day for your family, what races will you include?

Maths activities:

Monday

5a. Circle the fraction represented here.



$\frac{3}{8}$ $\frac{3}{5}$ $\frac{8}{3}$




5b. Circle the fraction represented here.



$\frac{6}{2}$ $\frac{2}{4}$ $\frac{4}{6}$



7a. True or false? Three fifths of the pineapples have been circled.



8a. Sort the fractions below.

Unit fractions Non-unit fractions

Three fifths $\frac{5}{7}$ $\frac{1}{10}$



7b. True or false? One quarter of the coconuts have been circled.



8b. Sort the fractions below.

Unit fractions Non-unit fractions

Two thirds $\frac{5}{9}$ Eight tenths



Wednesday

6a. There are ten children in a team.

Six of them are girls.

Write this number as a fraction.

—



6b. There are ten apples in a packet.

Nine of them are red.

Write this number as a fraction.

—



Tuesday

See below examples of previous year's fraction museums.



Thursday

TRUE OR FALSE

Five tenths is $\frac{2}{10}$ smaller than 7 tenths

Five tenths is $\frac{2}{10}$ larger than three tenths.

Do you agree?

Explain why.

English Activities

TUESDAY

- Who wrote Iron Man?
- Is it a fiction or non-fiction book?
- What happened in this book?
- Did you enjoy the book?
- Would you recommend the book to someone else?
- What age and interests is this book suitable for and why?
- How many stars out of 10 would you give the book?

WEDNESDAY

Book Review

Book Title: _____ Who would you recommend the book to? Why? _____

Author: _____

Fiction or Non-fiction: _____

What is the book about? _____

Book Illustration

Rating: ☆☆☆☆☆

What ages and interests is this book suitable for? Why? _____

Book Review

Book Title: _____

Author: _____

Illustrator: _____

Plot: _____

Setting: _____

Character: _____

Genre: _____

My Star Rating: ☆☆☆☆☆

Why I read the book: _____

This book made me feel: _____

How I feel about this character and why: _____

THURSDAY

1. I don't like carrots said the little girl.
2. It's time for bed said Dad.
3. Write the date in your book the teacher told the children.
4. Let down your hair the knight shouted to the princess.
5. The cat chased be through the garden whispered the mouse.
6. Jim ate all the jam exclaimed Katie.