


## Additional Activities for Y4



The year 2020 marks 75 years since the original VE Day, 8<sup>th</sup> May 1945.



Here are pictures of people celebrating the first VE Day. What do you think VE Day is?



On Friday 8<sup>th</sup> May, is the celebration of VE Day, can you plan a stay at home 'street party'?

You might like to -

Make bunting and posters to decorate your house in red, white and blue.

Bake a cake

Have a picnic in your front garden.

Salute the heroes of VE Day at 3pm.

Take photos or draw a picture of how you celebrated.

## Maths

Remember to keep practising your times tables. How fast can you complete the grids?


X	1	2	3	4	5	6	7	8	9	10	11	12
1												
2												
3												
4												
5												
6												
7												
8												
9												
10												
11												
12												

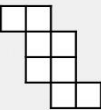
X	1	2	3	4	5	6	7	8	9	10	11	12
1												
2												
3												
4												
5												
6												
7												
8												
9												
10												
11												
12												


You can also use the games and activities at [www.timestables.co.uk](http://www.timestables.co.uk)


## Area


What is the area of each shape below?

A. 

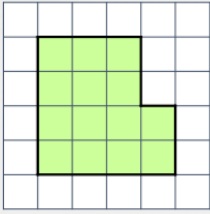
B. 

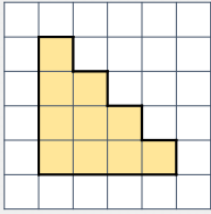
C. 

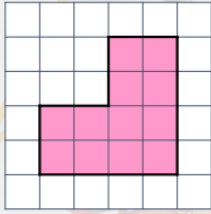
D. 

E. 

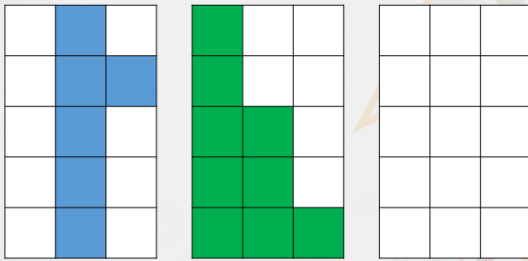
Find the area of the shapes below.

A. 


B. 

C. 

Jemima wants to create three different rectilinear shapes using 24 square tiles. She has completed two. Create a shape with the remaining tiles.

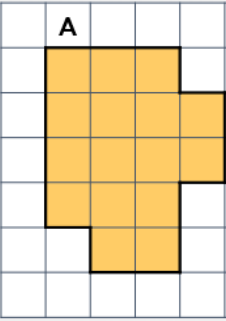


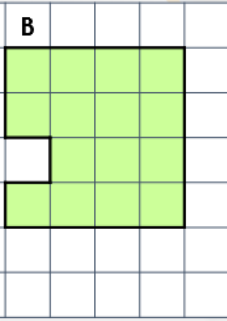
Megan has drawn 3 different rectilinear shapes using square tiles. Each shape has an area of 16 squares and has no more than 6 sides. What shapes could she have drawn?



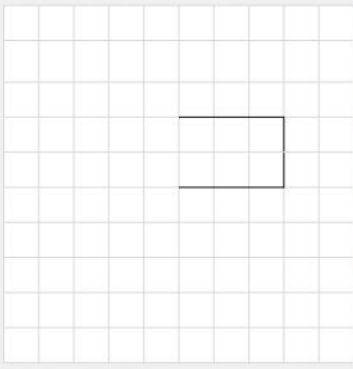
## Problem solving and reasoning

Which shape has the largest area?


A. 

B. 


Complete the shape so that it has an area of 15 square tiles.

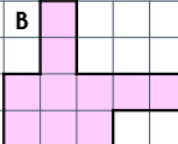


Draw a rectilinear shape with an area greater than 14 squares.



Kiran and Max are comparing the area of two shapes.

A. 

B. 



Shape A has a larger area.

The shapes have the same area.



Who is correct? Prove it.

## English

### Summer Term Week 3 Spellings to learn

Adding the prefix 'auto' meaning *self* or *own*.

autograph	automatic	autocorrect	autopsy	autonomy
autobiography	autofocus	autopilot	automobile	autocue

### SPAG Practice

#### Direct Speech

## Mix and Match

Choose one piece of direct speech, one reporting clause and one extra detail. How many different sentences can you write? Make sure that you punctuate them correctly.

Direct Speech	Reporting Clause	Extra Detail
I want to go home.	said Maureen	angrily
That's disgusting!	asked Frank	at midnight
How much is it?	the little girl asked	whilst holding a key
No.	she exclaimed	jokingly
Let me have a look.	he roared	urgently
Can I see the doctor?	Hattie replied	at 4 p.m.

#### Suggested writing activities linked to VE Day:

##### Activity 1:

Research VE Day. A good clip to watch can be found at

<https://www.bbc.co.uk/teach/class-clips-video/history-ks2-ve-day/z7xtmfr>

Present research in a, e.g. fact file, poster or PowerPoint presentation.

## Activity 2:


# VE Day Street Party Diary

Your task is to choose one person from this street party on 8th May, 1945 and write a diary entry for them about how they felt about the war ending.



A successful diary entry should answer the following from your chosen person's view:

- Have they seen the Blitz?
- Do they know someone fighting?
- Have they lost anyone in the war?
- How have they coped with rationing?
- How do they feel about the Germans?
- Have they been evacuated?
- Do they expect things to now return to normal?
- Has the war changed the world?



## RE

### Hinduism –Raksha Bandan

The annual Hindu festival of Raksha Bandan celebrates the love between brothers and sisters. Raksha means “love” and Bandan means “tie”. Sisters give a rakhi, or string bracelet to their brothers on this day. He will wear it all year, and it symbolises that brothers should protect their sisters. Raksha Bandan is also a day to dress up in traditional clothes, and remember an ancient story from the Hindu scriptures.

The god Vishnu had gone to live with King Bali, and Vishnu’s wife Lakshmi missed him. She visited King Bali and tied a rakhi to him, and the king asked her what she would like in return. She asked for him to let her husband come home. The story shows the generosity of the king, and the festival encourages Hindus to be generous.

If you don’t have a brother, you can give a rakhi to a cousin or a friend.

Watch the video clip <https://www.bbc.co.uk/teach/class-clips-video/religious-studies-ks2-my-life-my-religion-hinduism-celebrating-raksha-bandan/zjkygwx>

Explain what would you do to celebrate the love between your brothers and sisters.

## PSHE

### People around us

3. What do you think it means to work cooperatively?

Work cooperatively with your family to colour in these words. Discuss which words describe members of your family. How did you make your decisions?

nature-lover loving peaceful kind forgiving respectful helpful compassionate  
 authentic brave pet-lover positive caring giver authentic  
 strong courageous thoughtful soft-hearted  
 trustworthy wise responsible energetic  
 gentle understanding generous  
 trustworthy

**Science**

Name of tooth:

Function:

Name of tooth:

Function:

Name of tooth:

Function:

Name of tooth:

Function:

Name of tooth:

Function:

Key:

- 
- 
- 
-

Copy the diagram of the teeth. Can you name the tooth and describe the function?

Incisor	Molar	Biting and cutting food	Grinding food
Wisdom Tooth	Canine	Tearing and ripping food	No function anymore
Premolar	Holding and crushing food		

## History

<https://www.bbc.co.uk/bitesize/topics/zxsbcdm>

Continue to add information to your Anglo-Saxons information booklet, using the information from the BBC schools website (above). This week you could include information about Anglo-Saxon art, culture and beliefs.

## DT/Art

<https://www.bbc.co.uk/teach/class-clips-video/art-and-design-draw-self-portrait/z6ytscw>

Watch the BBC schools clip above which demonstrates how to draw a life-like self-portrait or portrait. Draw your own self-portrait or portrait of a person or special object of your choice.

## PE

Follow Joe Wickes daily workout on YouTube

Can you make up games to play with your family?

Keep safe, be kind and take care of your family.

Enjoy this week's activities.

Mrs Green, Mrs Storr and Mrs McGee